




Numere lipsă

Completează numerele care lipsesc.



1

2

5

7

8

11

13

17

19

21

24

25

26

30


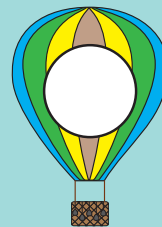



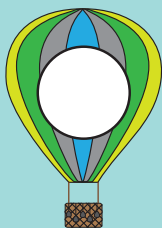

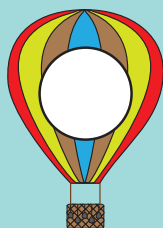




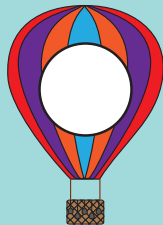
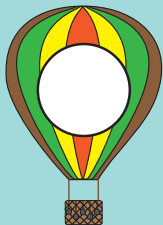
Numerele de la 1 la 100

Scrive numerele care lipsesc.

1									10
11									20
21									30
31									40
41									50
51									60
61									70
71									80
81									90
91									100

Numără descrescător

Completează numărând descrescător de la 20 la 1.





Labirintul pisicii

Ajută pisica să străbată labirintul pentru a ajunge la pește, urmărind traseul numerelor 101-120.



101

102

103

109

110

108

104

107

116

111

114

105

101

109

108

107

106

109

110

102

118

119

103

111

116

117

120

112

112


115

106

113

114

104



Ce urmează?

Scrie numerele care urmează după cele date.

14

19

16

20

13

24

28

12

27

40

58

62

29

33

59

37

89

36

44

19

80

52

86

73

Înainte, între și după

Scrive numerele care se află înainte, între și după numerele date.

ÎNAINTE

○ ← 54

○ ← 67

○ ← 82

○ ← 79

○ ← 38

○ ← 90

ÎNTRE

77 ○ 79

48 ○ 50

60 ○ 62

83 ○ 85

19 ○ 21

56 ○ 58

DUPĂ

49 → ○

20 → ○

71 → ○

99 → ○

44 → ○

67 → ○